









Goal

Discover which one of the four dots surrounding a given letter is in fact the real one so that when all dots are assigned, all the clues are satisfied.

Rules

1. All the clues present some geometrical shapes and/or proportions. The shapes can be: lines, angles, areas or polygons.

2. Simple special elements used as icons have the following meaning:

- | | | |
|---------------------------------------|---|---|
| \perp - two lines are perpendicular |  - a triangle |  - a trapezium |
| \parallel - two lines are parallel |  - a square |  - a pentagon |
| $S(\)$ - the area of some shape |  - a rectangle |  - a hexagon |
| $=$ - two objects are equal |  - a parallelogram | |
| \sphericalangle - an angle |  - a rhombus | |

$AC \perp CD$

$AB \parallel CD$

